



TIME STORY WORKSHEET

Name: _____





School gets out at 3:10. Chris stayed at school to watch basketball practice for 15 minutes and then left to go home. What time was it when Chris left school?

Answer 3:25

Directions:

1. Draw a picture of a clock.
2. Fill in the blanks to the story.
3. Make hands on the clock to show the times.
4. Solve your time story problem and write in the answer.



_____ gets out at _____. _____ stayed at _____ to watch
_____ for _____ minutes and then left to go home. What time was it when
_____ left _____? Answer _____