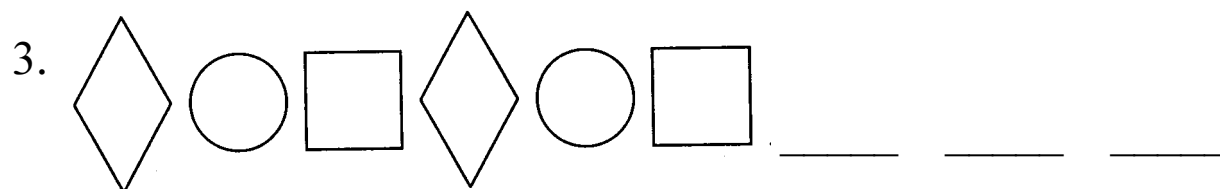
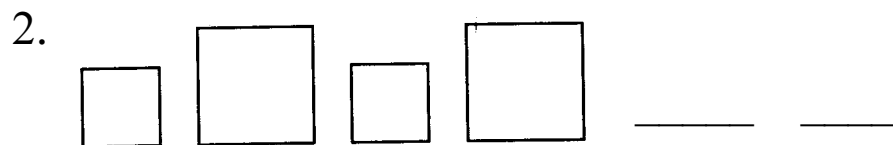
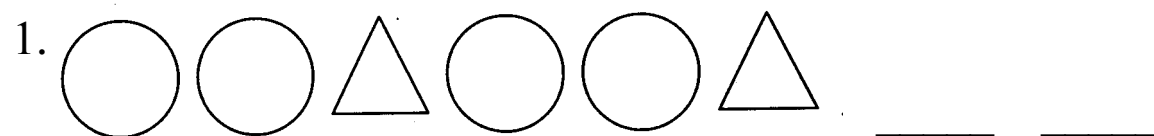


Assessment: Patterns

Define the shapes that come next in the pattern.



4. ee u ee u _____

5. a b c _____

6. m ow m ow _____

7. 2 4 6 _____

8. 50 _____ 70 _____ 90

9. 4 _____ 12 _____ 20

10. Create your own pattern.